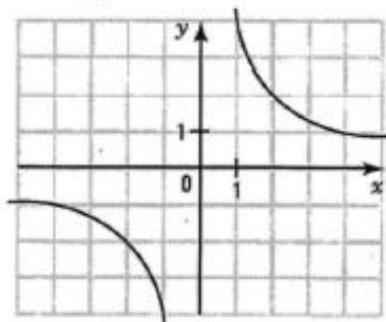
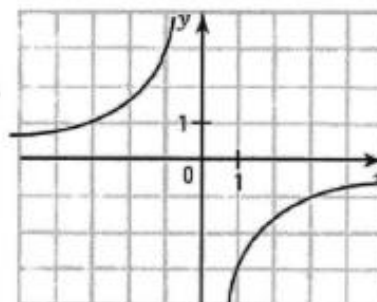


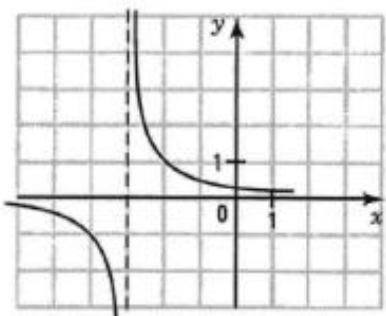
1. a) $f(x) = \frac{4}{x}$.



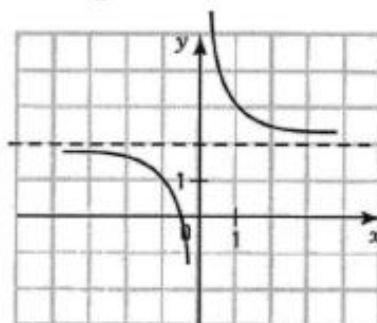
b) $f(x) = -\frac{3}{x}$.



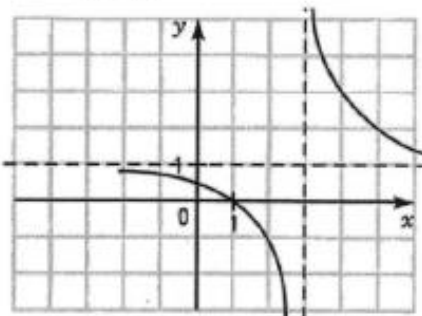
c) $f(x) = \frac{1}{x+3}$.



d) $f(x) = \frac{1}{x} + 2$.



e) $f(x) = \frac{2}{x-3} + 1$.



f) $f(x) = \frac{3}{-2(x+1)} + 2$.

